



Math Activities



Match each clock to the words that tell its time.

- 1 four o'clock
- 2 nine o'clock
- 3 eleven o'clock
- 4 three o'clock
- 5 one o'clock
- 6 eight o'clock
- 7 twelve o'clock
- 8 ten o'clock
- 9 seven o'clock
- 10 five o'clock
- 11 six o'clock
- 12 two o'clock





Match each clock to the words that tell its time.

1 four o'clock

2 nine o'clock

3 eleven o'clock

4 three o'clock

5 one o'clock

6 eight o'clock

7 twelve o'clock

8 ten o'clock

9 seven o'clock


10 five o'clock

11 six o'clock

12 two o'clock




Color the alien lamps that total 3 red
 Color the alien lamps that total 4 blue
 Color the alien lamps that total 5 green
 Color the alien lamps that total 10 yellow



Copy these pairs of numbers into the table below.
 Can you think of any other pairs? Add them to the table.

Pairs that total 3	Pairs that total 4	Pairs that total 5	Pairs that total 10
_____	_____	_____	_____
_____	_____	_____	_____
_____	_____	_____	_____
_____	_____	_____	_____
_____	_____	_____	_____

Color the alien lamps that total 3 red
 Color the alien lamps that total 4 blue
 Color the alien lamps that total 5 green
 Color the alien lamps that total 10 yellow




Copy these pairs of numbers into the table below.
 Can you think of any other pairs? Add them to the table.

Pairs that total 3	Pairs that total 4	Pairs that total 5	Pairs that total 10
<u>2+1</u>	<u>2+2</u>	<u>2+3</u>	<u>5+5</u>
<u>1+2</u>	<u>3+1</u>	<u>3+2</u>	<u>7+3</u>
<u>3+0</u>	<u>0+4</u>	<u>4+1</u>	<u>6+4</u>
<u> </u>	<u> </u>	<u> </u>	<u> </u>
<u> </u>	<u> </u>	<u> </u>	<u> </u>

Study Island 1st Grade Math - Length

Question 1 .

How many fish hooks long is the fish?



8 7 9

Question 2 .


How many erasers long is the rainbow sticker?



1 3 2

Question 3 .

How many hands long is the horse?



15 12 13

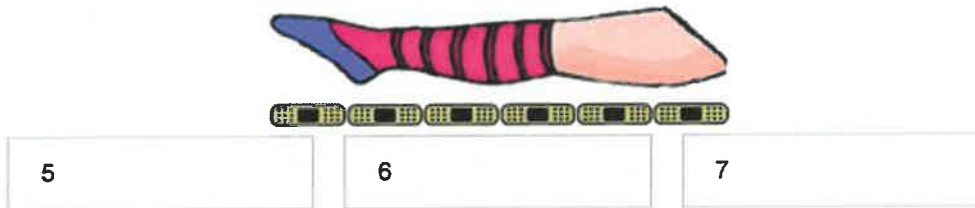
Question 4 .

How many bones long is Lucky's doghouse?



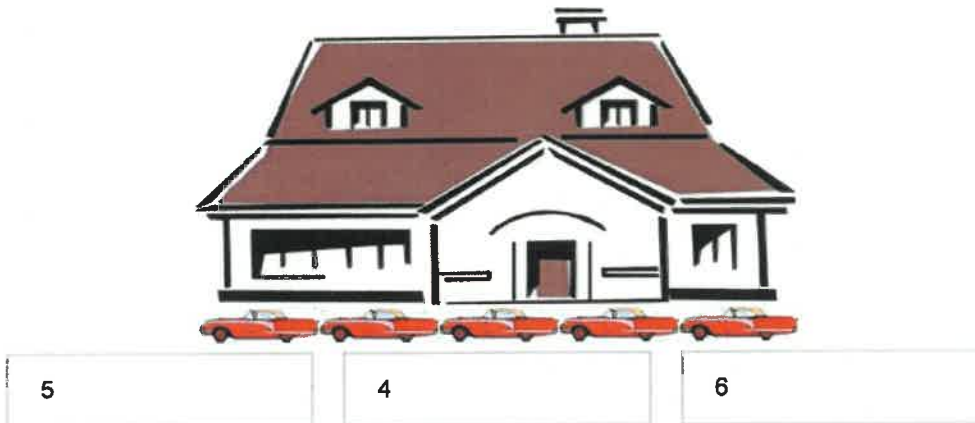
Question 5 .

How many bandages long is Katie's leg?



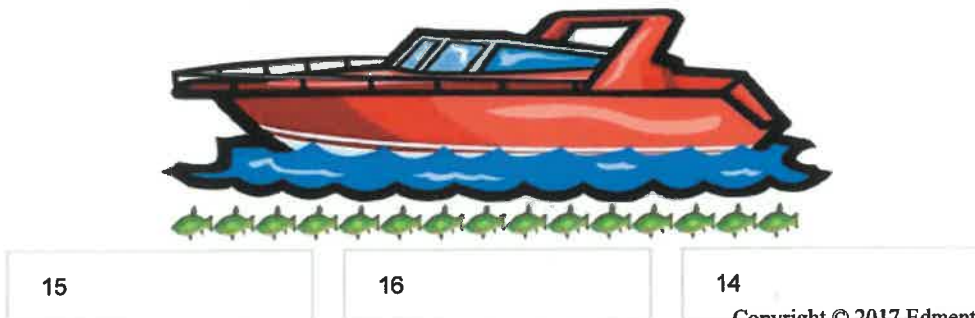
Question 6 .

How many cars long is Mr. Johnson's house?



Question 7 .

How many fish long is the boat?



Question 8 .

Use the ruler in the toolbar to measure the objects and put them in order from longest to shortest.



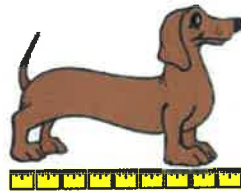
Y, Z, X

Z, Y, X

X, Z, Y

Question 9 .

How many inch marks long is the dog?



9

10

8

Question 10 .

Use the ruler in the toolbar to measure the objects and put them in order from shortest to longest.



X, Y, Z

Z, X, Y

Y, X, Z

Explanations

1. There are 8 fish hooks end-to-end along the fish, so the fish is 8 fish hooks long.

2. There are 3 erasers end-to-end along the sticker, so the rainbow sticker is 3 erasers long.

3. There are 15 hands end-to-end along the horse, so the horse is 15 hands long.

4. There are 7 bones end-to-end along the doghouse, so Lucky's doghouse is 7 bones long.

5. There are 6 bandages end-to-end along Katie's leg, so her leg is 6 bandages long.

6. There are 5 cars end-to-end along the house, so Mr. Johnson's house is 5 cars long.

7. There are 15 fish end-to-end along the boat, so the boat is 15 fish long.

8. Use the ruler to measure the objects.

The paddle is 1 inch long.

The hockey stick is 3 inches long.

The bat is 2 inches long.

So, the order of the objects from longest to shortest is hockey stick, bat, paddle, or **Y, Z, X**.

9. There are 9 inch marks end-to-end along the dog, so the dog is 9 inch marks long.

10. Use the ruler to measure the objects.

The shirt is 4 centimeters long.

The shoe is 2 centimeters long.

The pants are 5 centimeters long.

So, the order of the objects from shortest to longest is shoe, shirt, pants, or **Y, X, Z**.

Answers: Math - Length

1. A
2. B
3. A
4. B
5. B
6. A
7. A
8. A
9. A
10. C